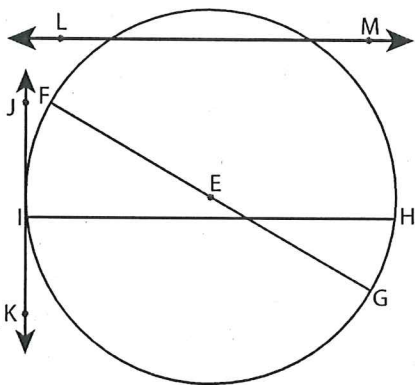


Parts of Circle

Identify the parts of each circle.

1)

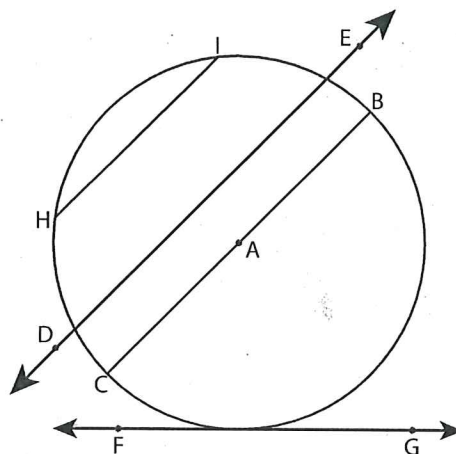


Circle = _____ Chord = _____

Radius = _____ Tangent = _____

Diameter = _____ Secant = _____

2)

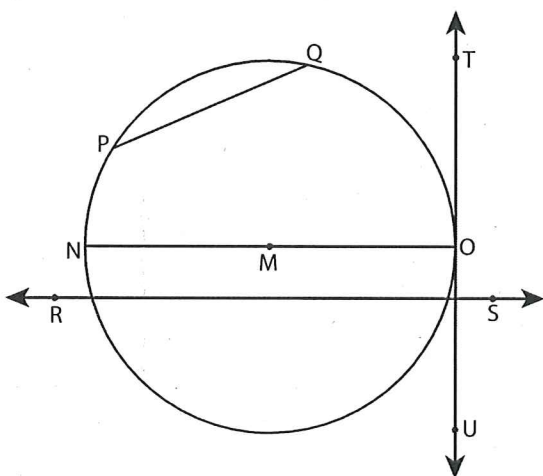


Circle = _____ Chord = _____

Radius = _____ Tangent = _____

Diameter = _____ Secant = _____

3)

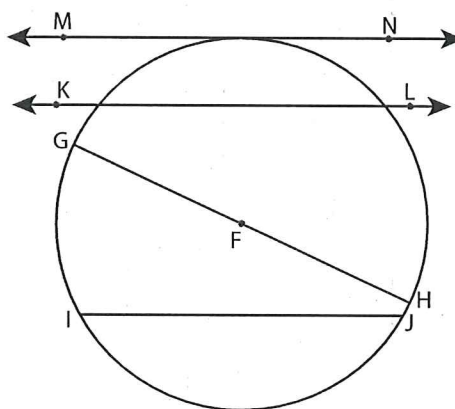


Circle = _____ Chord = _____

Radius = _____ Tangent = _____

Diameter = _____ Secant = _____

4)



Circle = _____ Chord = _____

Radius = _____ Tangent = _____

Diameter = _____ Secant = _____