


Name : \_\_\_\_\_


Score : \_\_\_\_\_

### Counting Cubes

Count the cubes and find the volume of each rectangular prism.


 = 1 cm<sup>3</sup>

1)



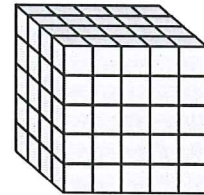
Volume = \_\_\_\_\_

2)



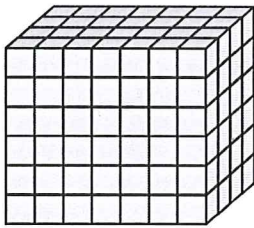
Volume = \_\_\_\_\_

3)




Volume = \_\_\_\_\_

4)



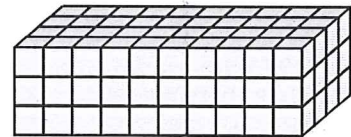
Volume = \_\_\_\_\_

5)




Volume = \_\_\_\_\_

6)



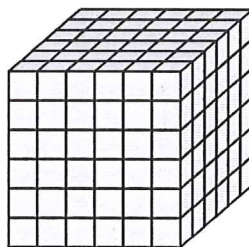
Volume = \_\_\_\_\_

7)



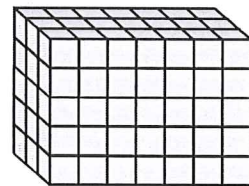
Volume = \_\_\_\_\_

8)



\_\_\_\_\_

9)



Volume = \_\_\_\_\_